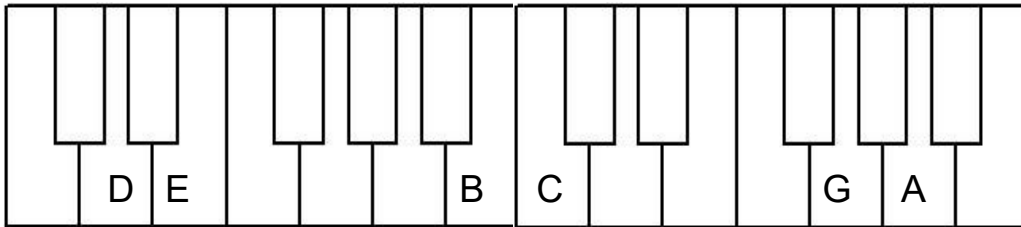
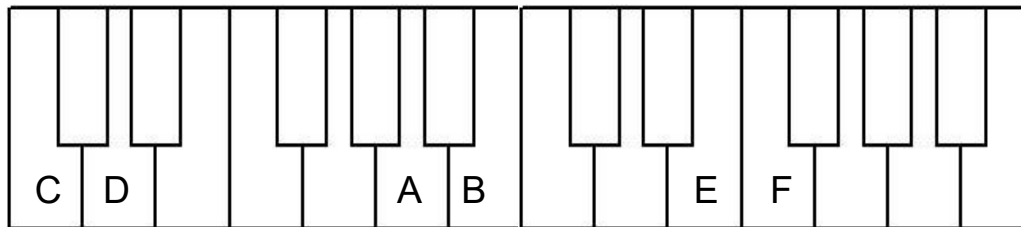


# Grade Two Worksheet 1

1. Draw a circle around the correct answer to show the distance between the two white keys.




half step   whole step                      half step   whole step                      half step   whole step



half step   whole step                      half step   whole step                      half step   whole step

2. Circle the measure that moves only by 2nds.

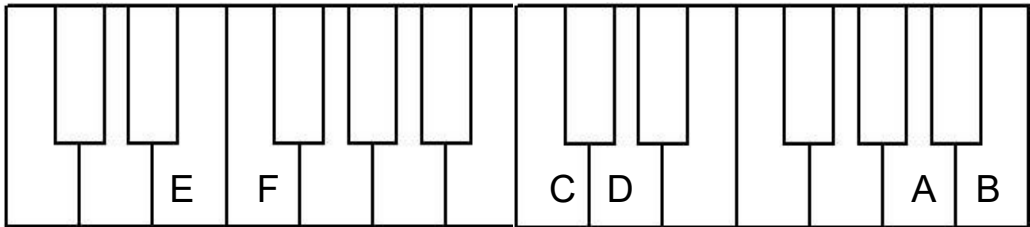


3. Circle the measure that moves only by 3rds.

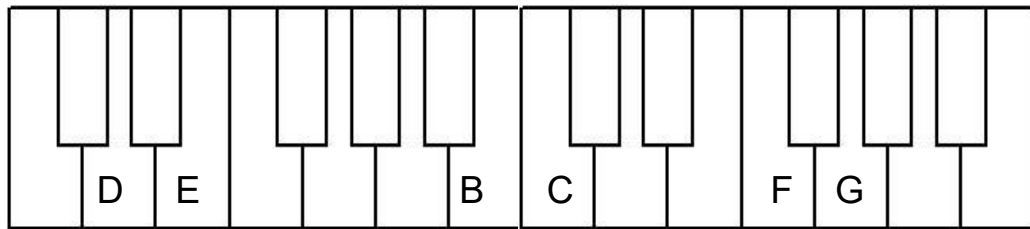


# Grade Two Worksheet 2

1. Draw a circle around the correct answer to show the distance between the two white keys.




half step   whole step                      half step   whole step                      half step   whole step



half step   whole step                      half step   whole step                      half step   whole step

2. Circle the measure that moves only by 2nds.



3. Circle the measure that moves only by 3rds.

