


Grade Six Worksheet 1

1. Identify each interval as a **MAJ 3rd** or a **min 3rd**.




Maj 3rd Maj 3rd Maj 3rd min 3rd min 3rd Maj 3rd

2. A. Color in the triad root.

B. Write the name of that note on the first line.

C. Identify each triad as major or minor on the second line.



b min D Maj Bb Maj ab min cb Maj f# min


3. On the musical

A. Name the Key.

B. Draw a circle around the minor 3rds.

C. Draw a box around the Major 3rds.

D. Write a IV under the subdominant triad.



F Major

IV

Grade Six Worksheet 2

1. Identify each interval as a **MAJ 3rd** or a **min 3rd**.

min 3rd Maj 3rd Maj 3rd min 3rd Maj 3rd min 3rd

2. A. Color in the triad root.

B. Write the name of that note on the first line.

C. Identify each triad as major or minor on the second line.

A Maj f# min G^b Maj d^b min f# min B Maj

3. On the music example below:

A. Name the key.

B. Draw a circle around the minor 3rds.

C. Draw a box around the Major 3rds.

D. Write a **IV** under the subdominant triad.

E. Write a **V** under the dominant triad.

F. Write a **I** under the tonic triad.

I Major **IV** **V** **I**